

Day 5

Year 3 tasks

English




Choose one of the book covers from World Book Day below.

*Look closely at the cover.

*Who might be the main characters?

*Where is the setting?

Now write a paragraph predicting what the story will be about.



Maths

Calculating Perimeter of a 2D Shape

Use your home learning books to practice calculating the perimeter of a 2D shape. Write the question number in your book and the answer next to it.

Remember perimeter means the total length around the whole shape. You will need to add each side together to find the perimeter. Please put the unit of measurement next to your answer. For example:

24 cm

cm = centimetres

Look at the bottom of the page at how many stars it has. The more stars the page has, the more challenging the questions are. Choose which set of questions suit you. Try and challenge yourself!

Geography

Draw a map showing your route to school. What do you see on the way eg, shops, different types of houses, playgrounds or other local amenities? Make sure you include these on your map. Which roads do you use – label these on your map.

Challenge: Create symbols to represent the different things you can see.